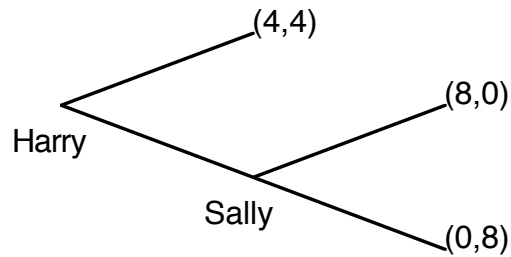


INR 3303 — Game Tree Practice Exercises
Prof. Paul A. Kowert

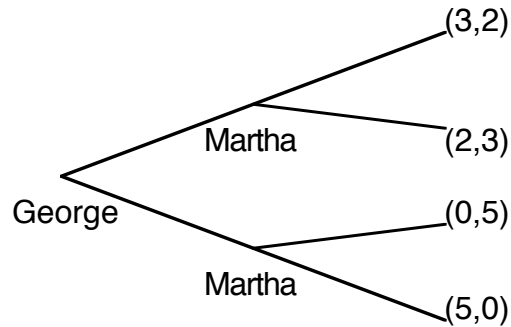
For problems 1-3, find the rollback equilibrium by crossing off inferior strategies. Payoffs are given as cardinal preferences (higher is better).

1.



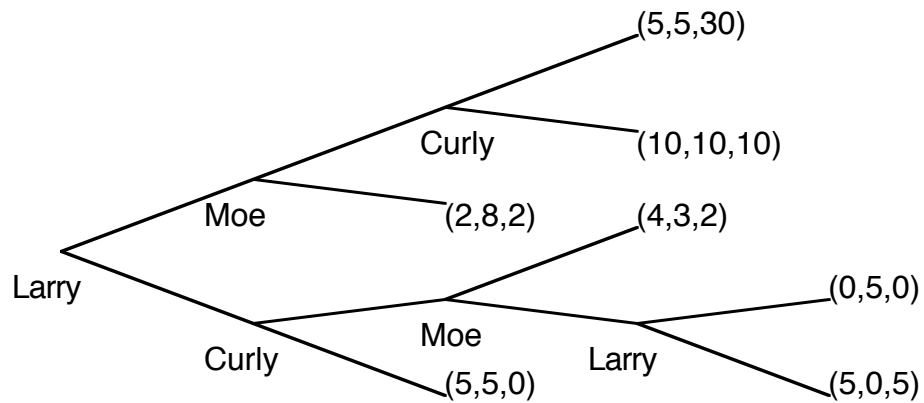
Payoffs in the order: (Harry,Sally)

2.



Payoffs in the order: (George,Martha)

3.



Payoffs in the order: (Larry,Moe,Curly)